



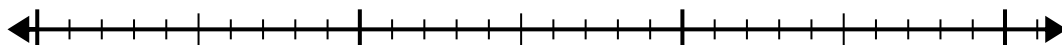
Use the number line to solve the division problem.

Answers

1) $24 \div 8 =$

0

24

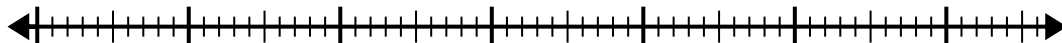


1. _____

2) $56 \div 8 =$

0

56

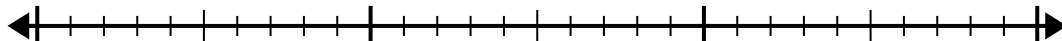


2. _____

3) $24 \div 4 =$

0

24

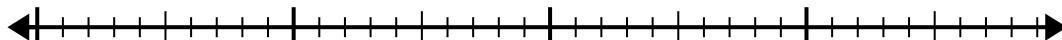


3. _____

4) $32 \div 4 =$

0

32




4. _____

5) $48 \div 8 =$

0

48

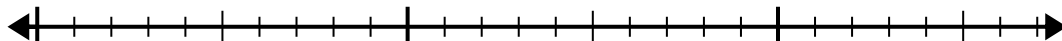


5. _____

6) $21 \div 7 =$

0

21

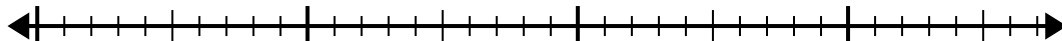


6. _____

7) $28 \div 4 =$

0

28

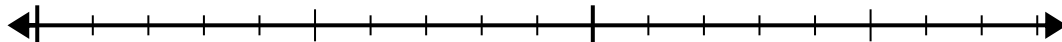


7. _____

8) $12 \div 4 =$

0

12

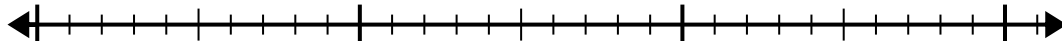


8. _____

9) $28 \div 7 =$

0

28

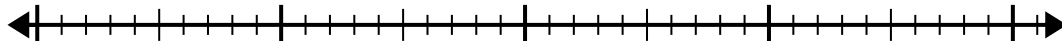


9. _____

10) $35 \div 7 =$

0

35

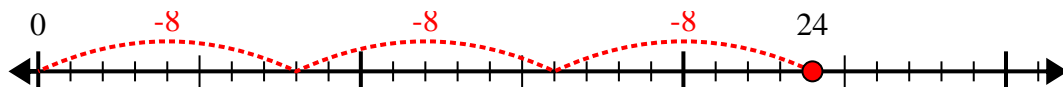


10. _____

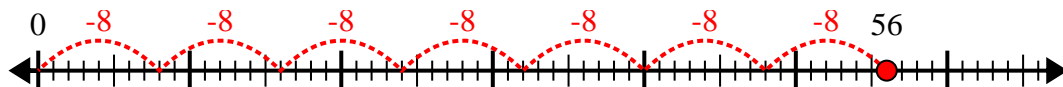


Use the number line to solve the division problem.

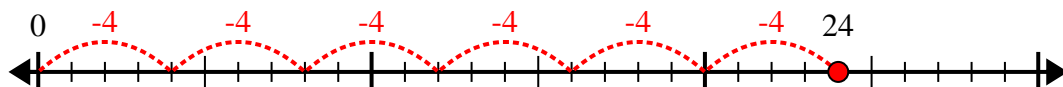
1) $24 \div 8 =$



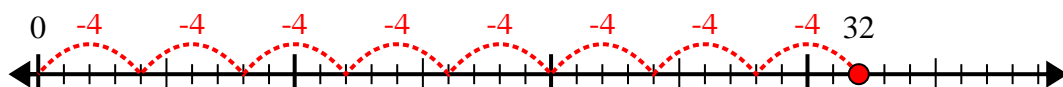
2) $56 \div 8 =$



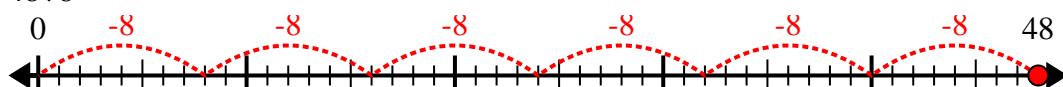
3) $24 \div 4 =$



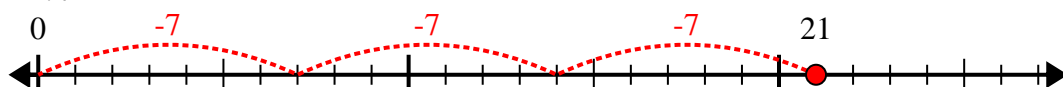
4) $32 \div 4 =$



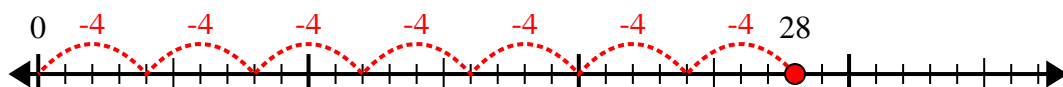
5) $48 \div 8 =$



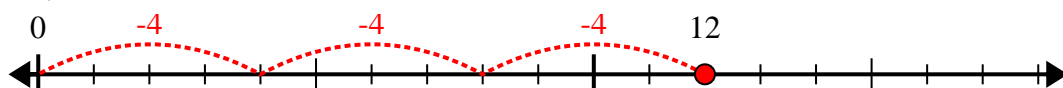
6) $21 \div 7 =$



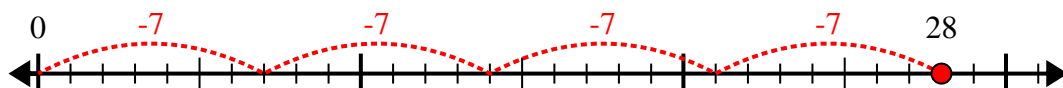
7) $28 \div 4 =$



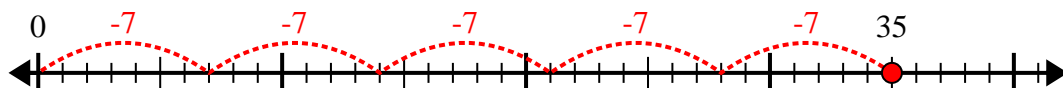
8) $12 \div 4 =$



9) $28 \div 7 =$



10) $35 \div 7 =$



Answers

1. 3

2. 7

3. 6

4. 8

5. 6

6. 3

7. 7

8. 3

9. 4

10. 5